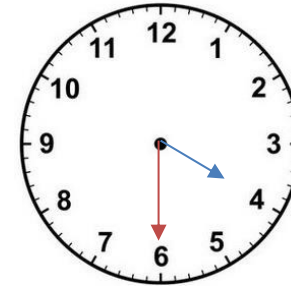


Quelle heure est-il ?

Compétence : Lire l'heure.

Consigne : Observe chaque horloge et indique l'heure de l'après-midi ou du soir.

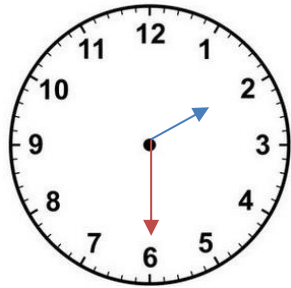
Matériel : 17 cartes à pince + 1 carte consigne



16h30

18h40

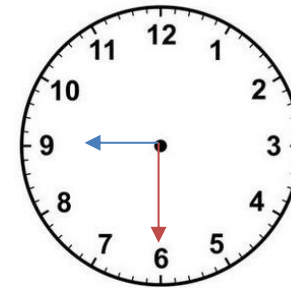
18h04



18h20

14h30

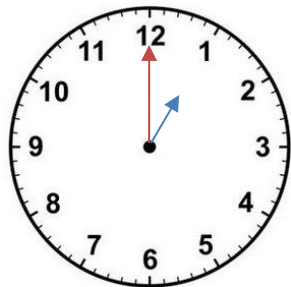
18h10



21h06

18h09

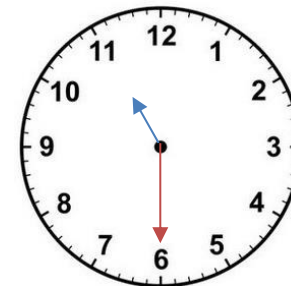
21h30



12h01

12h05

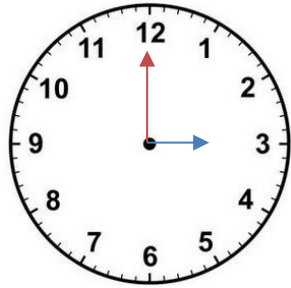
13h00



23h06

23h30

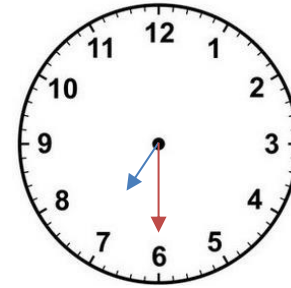
18h11



15h

12h30

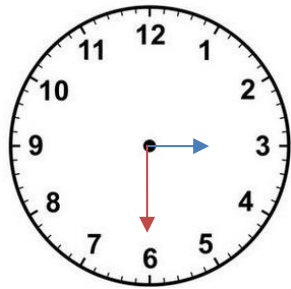
12h03



18h30

19h30

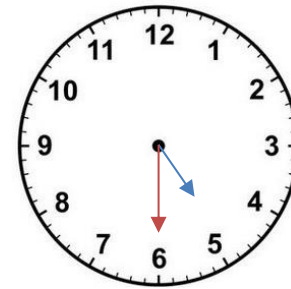
19h06



15h06

18h03

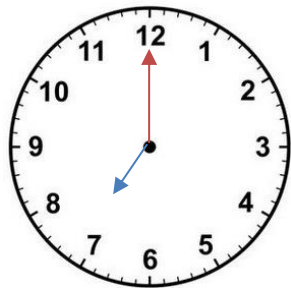
15h30



18h05

18h50

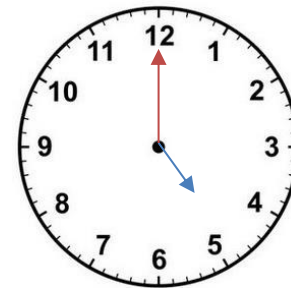
17h30



19h30

19h12

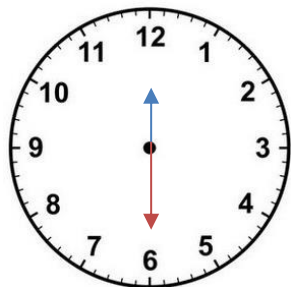
19h



17h

17h12

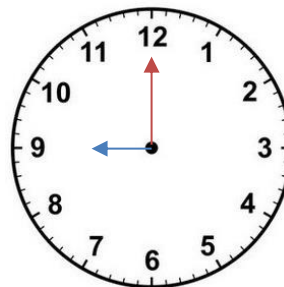
17h30



12h30

12h06

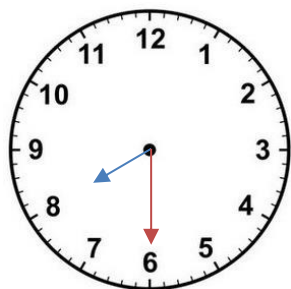
18h



21h30

12h09

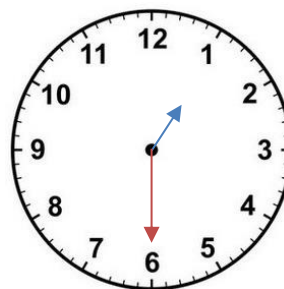
21h



18h30

20h30

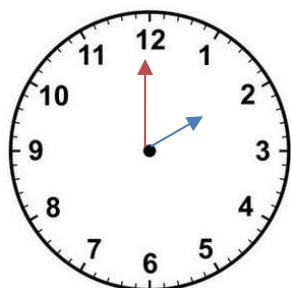
18h30



13h

13h30

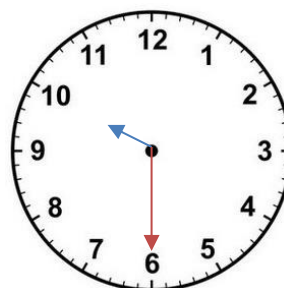
13h06



14h

12h02

14h30



22h30

22h

18h10